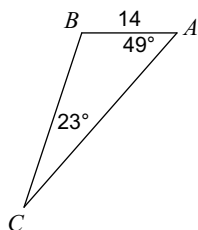


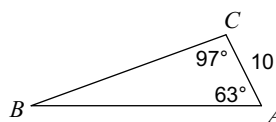
Law of Sines Practice

Solve each triangle. Round your answers to the nearest tenth.

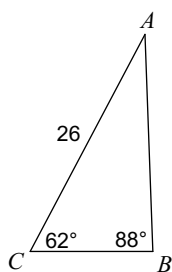
1)



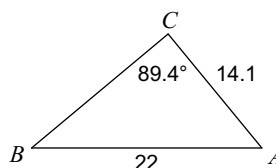
2)



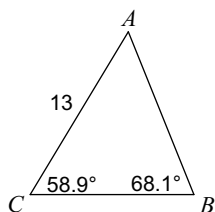
3)



4)



5)



Answers to Law of Sines Practice

1) $m\angle B = 108^\circ, a = 27, b = 34.1$

2) $m\angle B = 20^\circ, c = 29, a = 26.1$

3) $m\angle A = 30^\circ, a = 13, c = 23$

4) $m\angle B = 39.9^\circ, m\angle A = 50.7^\circ, a = 17$

5) $m\angle A = 53^\circ, c = 12, a = 11.2$